


Passing Time

Write the time under each clock. Use your individual clocks and number lines to tell how many minutes have passed from the start time to the end time.

1. Start Time



End Time



How many minutes have passed? _____

2. Start Time




End Time

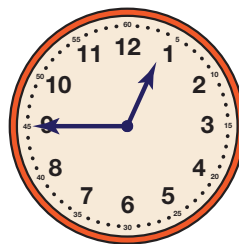


How many minutes have passed? _____

3. Start Time



End Time



How many minutes have passed? _____

4. Start Time




End Time




How many minutes have passed? _____

5. Start Time




End Time




How many minutes have passed? _____

6. Start Time



End Time



How many minutes have passed? _____