

4. Start Time




End Time




How many minutes have passed? _____

5. Start Time




End Time




How many minutes have passed? _____

6. Start Time



End Time



How many minutes have passed? _____