


Check Subtraction Problems

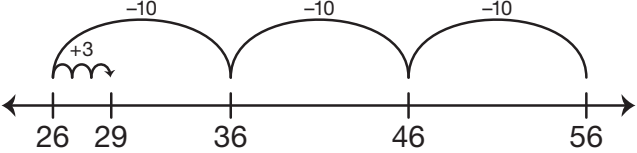
Pretend you are a teacher. Check to see how each student solved $56 - 27$.

1. Fern showed her work like this:



Fern

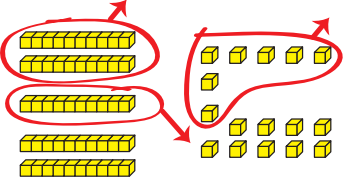
This is what I did:


$$\begin{array}{r} 56 \\ -27 \\ \hline \end{array}$$


Explain how she solved the problem.

2. Jason showed his work like this:

This is what I did:

$$\begin{array}{r} 56 \\ -27 \\ \hline \end{array}$$




Jason

Explain how he solved the problem.