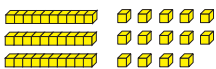

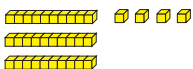


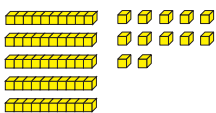
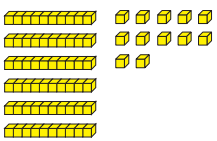
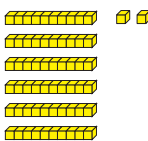
Matching Numbers



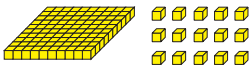
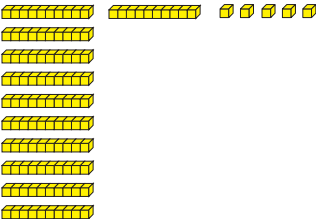
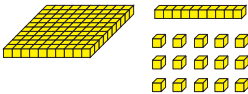
Which two sets of base-ten pieces show the same number?
 Draw a circle around the two that are the same.

1. A.  B.  C. 

What is the number? _____

2. A.  B.  C. 

What is the number? _____

3. A.  B.  C. 

What is the number? _____