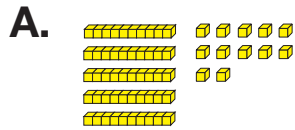
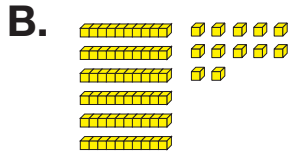


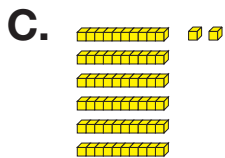
4. Write a number sentence to match the base-ten pieces.



Number sentence \_\_\_\_\_



Number sentence \_\_\_\_\_



Number sentence \_\_\_\_\_

5. Write each number in expanded form.

For example, 123 is  $100 + 20 + 3$ .

**A.** 76 = \_\_\_\_\_

**B.** 249 = \_\_\_\_\_

**C.** 112 = \_\_\_\_\_