



# City Buildings

- Use cubes to make buildings that look like the three pictures below. Find the volume of each building and write a number sentence to show your strategy. Include units.



**Building A**




**Building B**

Volume \_\_\_\_\_

Volume \_\_\_\_\_

Number sentence \_\_\_\_\_

Number sentence \_\_\_\_\_



**Building C**

Volume \_\_\_\_\_

Number sentence \_\_\_\_\_