

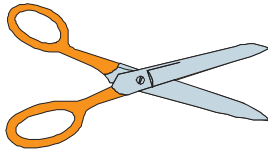


B Mass 1



Linda measured the mass of a small pair of scissors and a plastic ruler. The picture shows the masses used to balance each object.



1. Which object has the greater mass? Explain how you know.
2. Linda placed the scissors in one pan and the ruler in the other. How can she balance the two pans?
3. What masses can she use to balance two pairs of scissors?

