

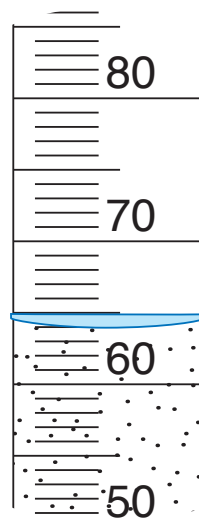
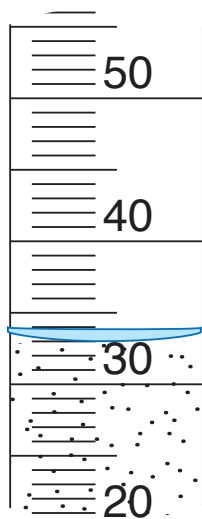
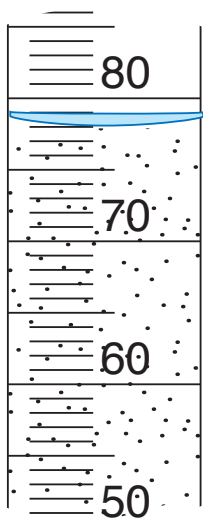
Check-In: Questions 2–5

2. Compare the volume in the different graduated cylinders. Use the information in your data table. Write *greater than*, *less than*, or *equal to* to complete each sentence.
- A. Cylinder C is _____ Cylinder D.
- B. Cylinder F is _____ Cylinder G.
- C. Cylinder F is _____ Cylinder E.
- D. Which cylinder has the greatest volume? _____
- E. Which cylinder has the least volume? _____

Mrs. Gomez's Class

Students in Mrs. Gomez's class also measured the volume of water in graduated cylinders.

3. What is the volume in each graduated cylinder?



- A. _____ B. _____ C. _____