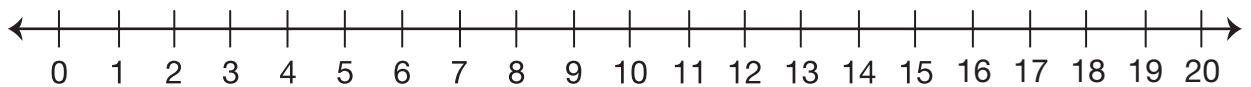


Equal Groups

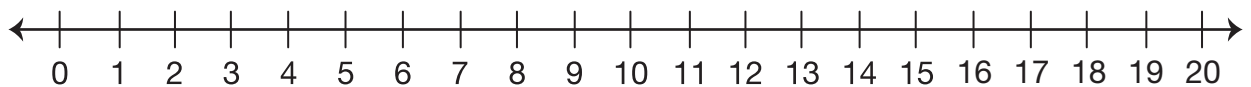
Use drawings or the number line to solve each problem. Write a number sentence for each problem. Remember to use labels.

1. There are 4 rows of 5 tiles. How many tiles are there altogether?



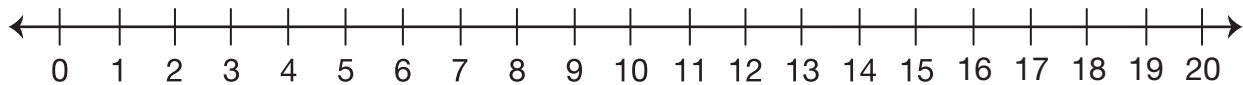
Number sentence _____

2. There are 3 rows of 6 tiles. How many tiles are there altogether?



Number sentence _____

3. Show how 3 rows of 4 = 4 rows of 3.



Number sentence _____

4. Is 15 an even or odd number? _____ Show or tell how you know.

5. Circle all the number sentences that have an even number for a sum.

A. $3 + 3$

B. $2 + 2 + 1$

C. $5 + 5 + 1$

D. $4 + 4$

E. $6 + 6$

F. $7 + 7$

G. $7 + 7 + 1$

H. $9 + 9$

I. $1 + 1$

J. $8 + 8 + 1$