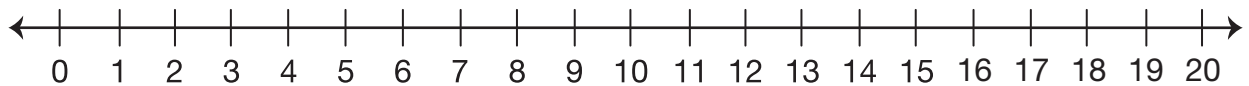


Solve Zoo Problems

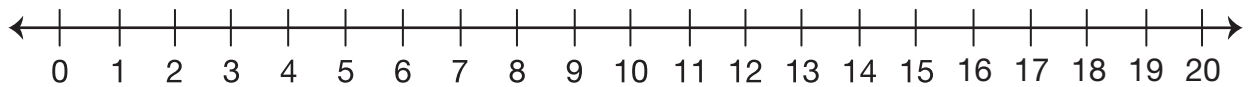
Solve each problem and write a number sentence. Show or tell how you solved each problem.

- 1.** There are 3 lion cubs, 4 tiger cubs, and 5 cheetah cubs at the Children’s Zoo. How many cubs are at the Children’s Zoo?



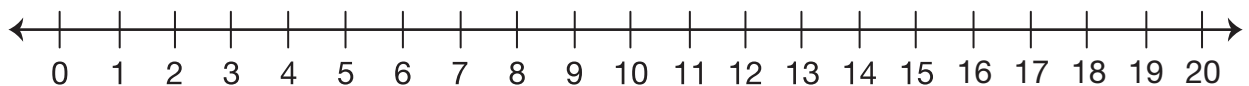
Number sentence _____

- 2.** There are 4 monkeys at the zoo. Each monkey ate 2 bananas. How many bananas did they eat altogether?



Number sentence _____

- 3.** Three tiger families are at the zoo. One family has 2 cubs, another has 6 cubs, and the third family has 1 cub. How many tiger cubs are there altogether?



Number sentence _____