

# Monkey Treats

**The object of the game is to have the highest total number of peanuts for the week.**

This is a game for two or more players.

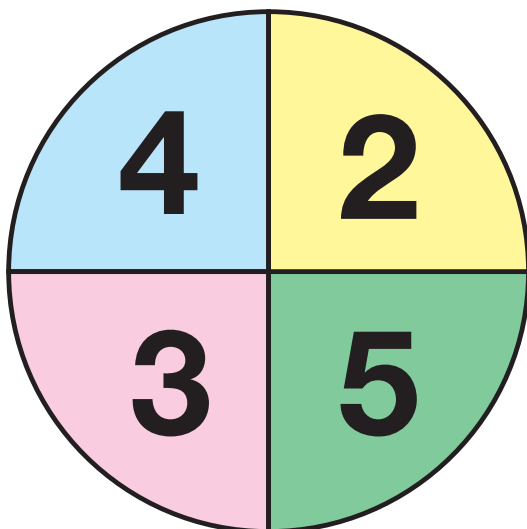
## Materials

- clear plastic spinner or pencil and paper clip
- Monkey Treats Recording Sheet

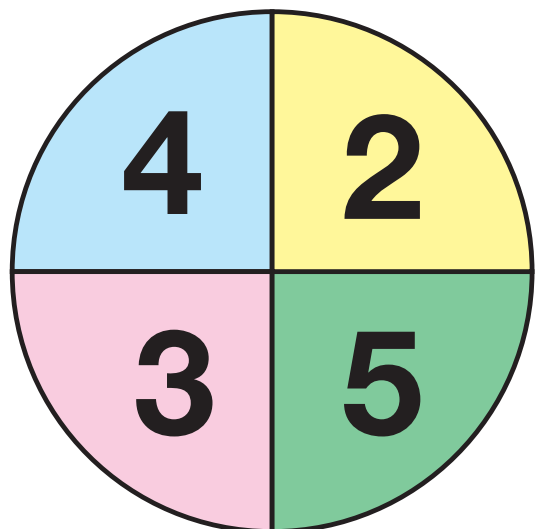
## Directions

1. Spin the Cups Spinner to find how many cups to draw.
2. Spin the Peanuts Spinner to find how many peanuts to draw in each cup.
3. Draw a picture on the Monkey Treats Recording Sheet that shows the number of cups and peanuts you spun.
4. Write an addition and a multiplication number sentence on the recording sheet that describes your cups and peanuts.
5. Add the peanuts column. The player with the highest total for the week is the winner.

**Cups Spinner**




**Peanuts Spinner**



## Monkey Treats Recording Sheet

Draw pictures showing the number of cups and peanuts you spin. Write an addition and a multiplication number sentence for each problem.

**Example:** 3 cups with 5 peanuts in each cup.



**Peanuts**

Addition number sentence                     5 + 5 + 5                    

Multiplication number sentence                     3 × 5                    

**15**

**Monday**

**Peanuts**

Addition number sentence \_\_\_\_\_

Multiplication number sentence \_\_\_\_\_

**Tuesday**

**Peanuts**

Addition number sentence \_\_\_\_\_

Multiplication number sentence \_\_\_\_\_

Name \_\_\_\_\_ Date \_\_\_\_\_

<b>Wednesday</b>	<b>Peanuts</b>
Addition number sentence _____	
Multiplication number sentence _____	
<b>Thursday</b>	<b>Peanuts</b>
Addition number sentence _____	
Multiplication number sentence _____	
<b>Friday</b>	<b>Peanuts</b>
Addition number sentence _____	
Multiplication number sentence _____	

**Total for Week** \_\_\_\_\_

Copyright © Kendall Hunt Publishing Company