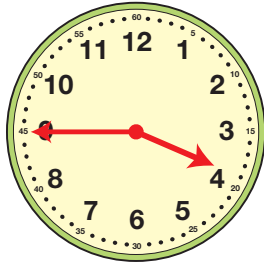



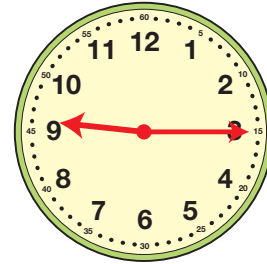
# U Matching Times



**Clock A**



**Clock B**



**Clock C**

1. Michael left school at 3:10. He stopped at a friend's house and got home 50 minutes later.

What time did Michael get home? \_\_\_\_\_

Which clock shows the time? \_\_\_\_\_

2. Roberto had a soccer game at 2:15. His game lasted 1 hour and 30 minutes.

What time did the game end? \_\_\_\_\_

Which clock shows the time? \_\_\_\_\_

3. Emily eats breakfast at 8:30. School starts 45 minutes later.

What time does school start? \_\_\_\_\_

Which clock shows the time? \_\_\_\_\_