


Parts and Wholes

Cover the Whole

Cover the shapes below with pattern blocks. For each question, use only one color of blocks.

1. Cover the blue rhombus with 2 pieces.

What color did you use? _____



2. Cover the red trapezoid with 2 pieces.


What color did you use? _____



3. Cover the red trapezoid with 3 pieces.

What color did you use? _____






4. Cover the yellow hexagon with 3 pieces.
What color did you use? _____

5. Cover the yellow hexagon with 6 pieces.
What color did you use? _____

6. Cover the yellow hexagon with 4 pieces.
What color did you use? _____

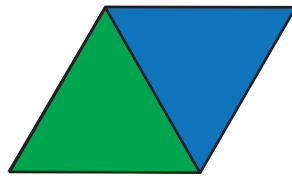
7. Cover this shape with 4 pieces.
What color did you use? _____



Name the Part

For each question, think about how many pieces you used to cover the whole shape. Then use one of the words in the box to fill in the blank.


half
fourth
third
sixth
eighth



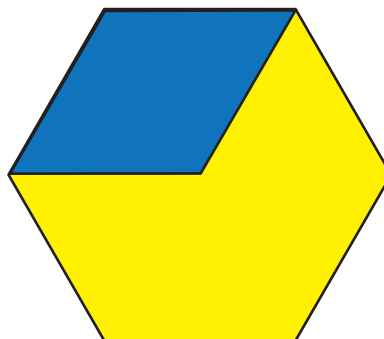
8. The green triangle is one- _____ of the blue rhombus.



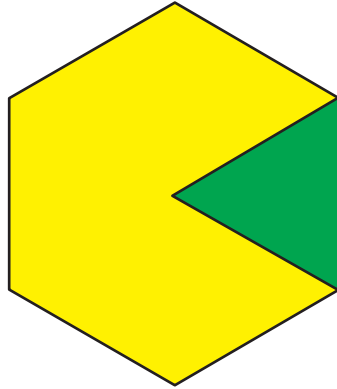
9. The brown trapezoid is one- _____ of the red trapezoid.



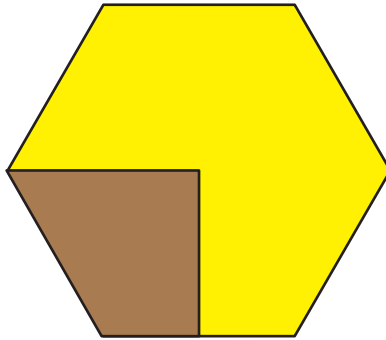
10. The green triangle is one- _____ of the red trapezoid.



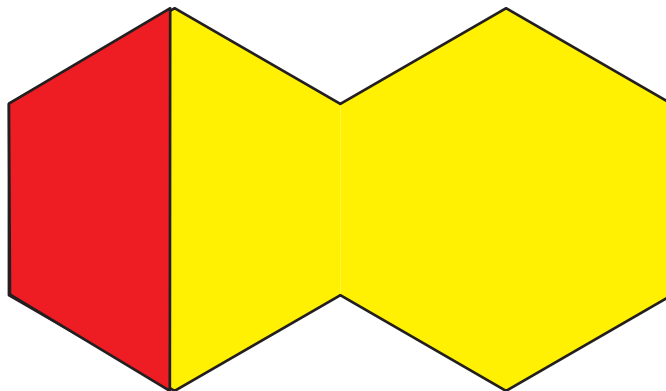
11. The blue rhombus is one- _____ of the yellow hexagon.



12. The green triangle is one- _____ of the yellow hexagon.



13. The brown trapezoid is one- _____ of the yellow hexagon.



14. The red trapezoid is one- _____ of the shape.