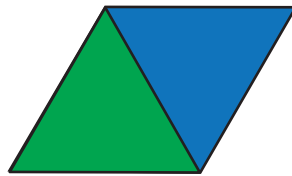



Name the Part

For each question, think about how many pieces you used to cover the whole shape. Then use one of the words in the box to fill in the blank.

half
fourth
third
sixth
eighth



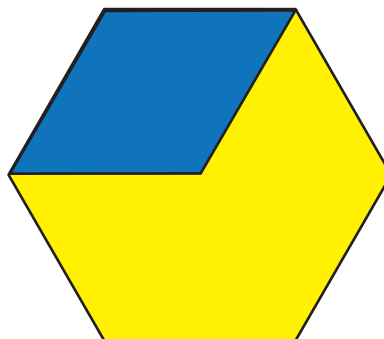
8. The green triangle is one- _____ of the blue rhombus.



9. The brown trapezoid is one- _____ of the red trapezoid.



10. The green triangle is one- _____ of the red trapezoid.



11. The blue rhombus is one- _____ of the yellow hexagon.