

# Show Part of the Whole

half	fourth	third	sixth	eighth
------	--------	-------	-------	--------

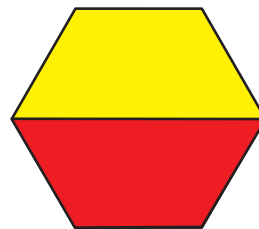
## Check-In: Questions 1–3

1. Kim is thinking about the names of parts of shapes. She calls the red trapezoid one-half of the yellow hexagon. She then wonders how the green triangle can also be called one-half of the blue rhombus.




Kim

Something seems wrong.  
Both parts cannot be “half.”



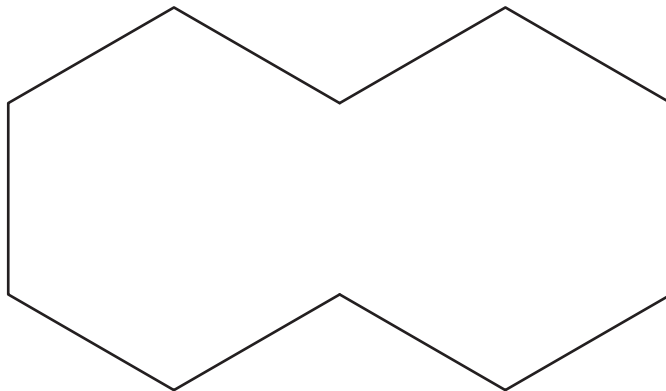
Do you agree with Kim? Why or why not?

2. This is the whole:



- A. Shade one-fourth of the whole in the shape above.
- B. The blue rhombus is one-\_\_\_\_\_ of the shape.

**3.** This is the whole:



- A.** Shade one-half of the whole in the shape above.
- B.** The red trapezoid is one-\_\_\_\_\_ of the shape.
- C.** Two red trapezoids are one-\_\_\_\_\_ of the shape.
- D.** The blue rhombus is one-\_\_\_\_\_ of the shape.