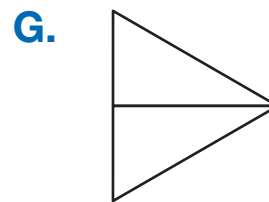
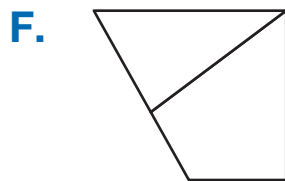


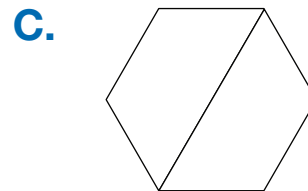
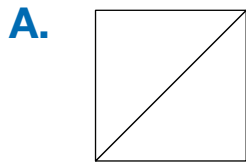



Fair Shares or Not Fair Shares

2 Fair Shares

1. Circle the shapes that are cut in half.



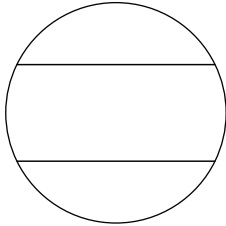
Check-In: Question 1H

H. Is the shape in Question 1B cut in half? Explain your answer.

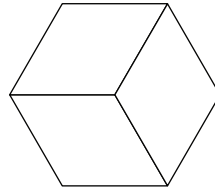
3 Fair Shares

2. Circle the shapes that are cut into thirds.

A.



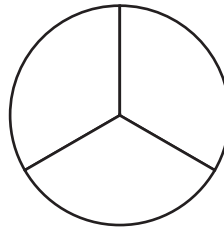
B.



C.



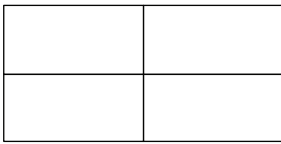
D.



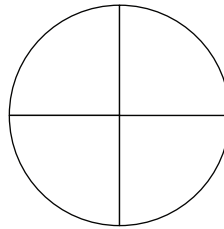
4 Fair Shares

3. Circle the shapes that are cut into fourths.

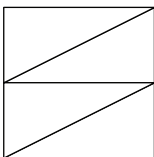
A.



B.



C.



D.

