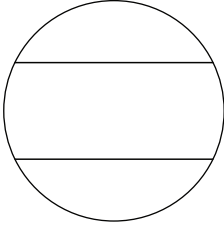


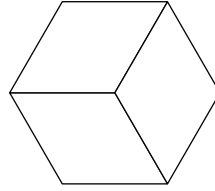
### 3 Fair Shares

2. Circle the shapes that are cut into thirds.


A.



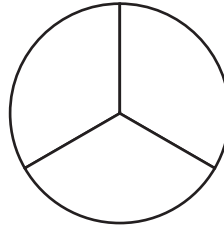
B.



C.



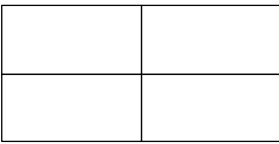
D.



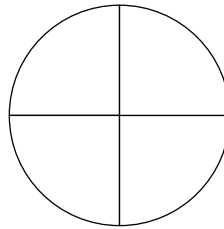
### 4 Fair Shares

3. Circle the shapes that are cut into fourths.

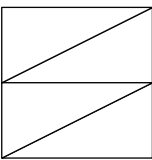
A.



B.



C.



D.

