



# Fourths, Thirds, and Halves


1. Circle the rectangles that show fourths.



2. Circle the squares that show thirds.



3. Circle the shapes that show halves.



4. Josh says, "Natasha and Jason ate the same amount of pizza for lunch." Do you agree with Josh? Why or why not?

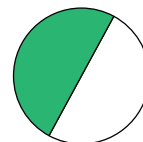


Natasha

I ate half of a pizza for lunch.



I ate half of a pizza for lunch, too.



Jason