


Cover Rectangles

Use square-inch tiles to cover the rectangles.



1. This is the whole:



How many tiles did you use to:

A. cover the whole rectangle?


B. cover one-half of the rectangle?

C. cover one-fourth of the rectangle?

D. cover one-third of the rectangle? _____

2. Cover one-half of the rectangle a different way than you did in Question 1B. How many tiles did you use?


3. This is the whole:



How many tiles did you use to:

- A. cover the whole rectangle? _____
- B. cover one-half of the rectangle? _____
- C. cover one-third of the rectangle? _____

4. This is the whole:



How many tiles did you use to:

- A. cover the whole rectangle? _____
- B. cover one-half of the rectangle? _____
- C. cover one-fourth of the rectangle? _____