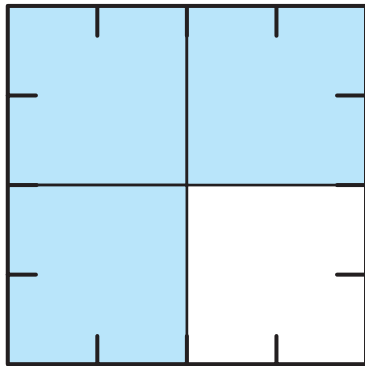


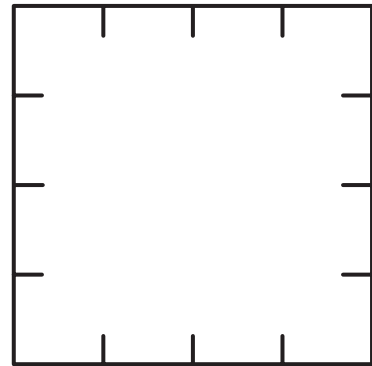
# One-Half Plus One-Fourth 1

1. What part of Square A is shaded? \_\_\_\_\_
2. What part of Square C is shaded? \_\_\_\_\_
3. What part of Square D is shaded? \_\_\_\_\_

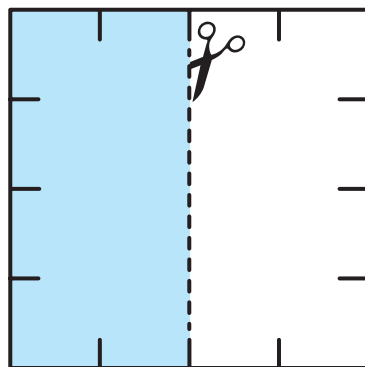
**Cut out the shaded parts in Squares C and D. Then paste them on Square B to look like Square A.**



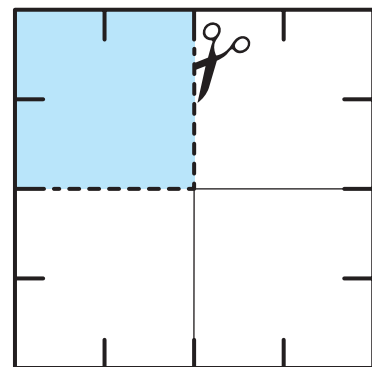
**Square A**



**Square B**



**Square C**



**Square D**