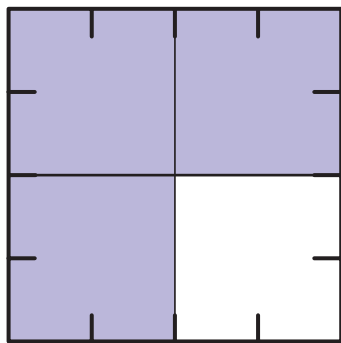


## One-Half Plus One-Fourth 2

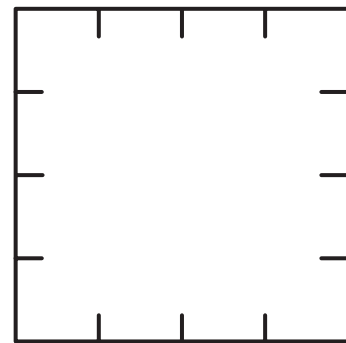
1. What part of Square A is shaded? \_\_\_\_\_
  
2. What part of Square C is shaded? \_\_\_\_\_
  
3. What part of Square D is shaded? \_\_\_\_\_

**Cut out the shaded parts in Squares C and D. Then paste them on Square B to look like Square A.**

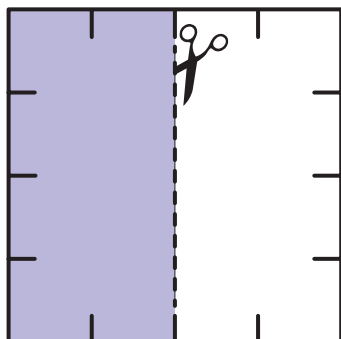
---



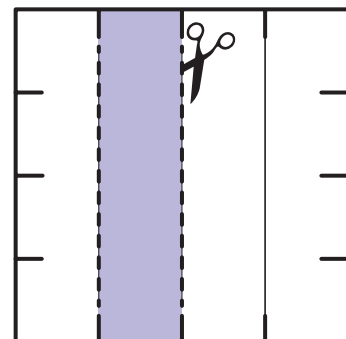
**Square A**



**Square B**



**Square C**



**Square D**