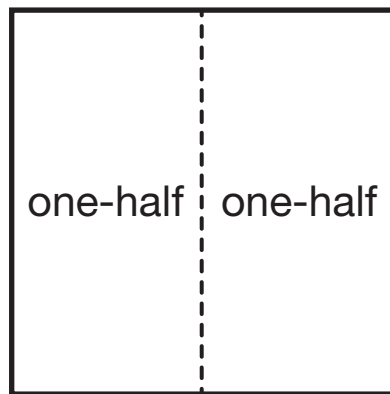


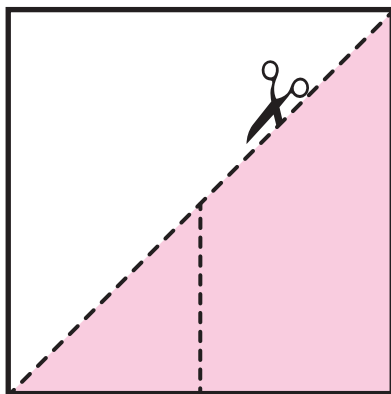
Puzzling Out Halves

Cut out the shaded parts in Squares A and B. Show that these really are each one-half of the whole square unit. Glue them onto the blank whole square unit in the work area.

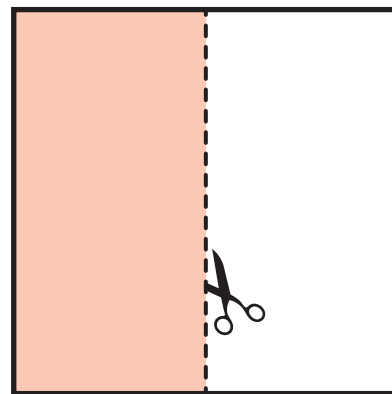
Work Area



_____ + _____ = _____



Square A



Square B