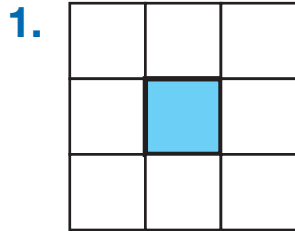


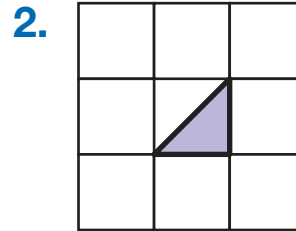
Shapes on Grids

Square Centimeter Halves and Fourths

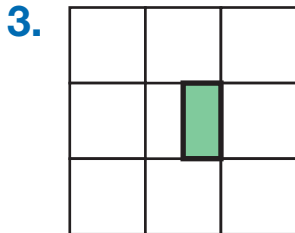
Find the area of each shaded shape. Include units.



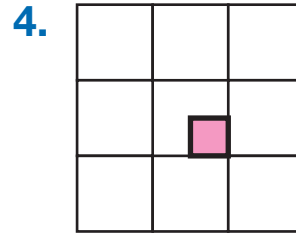
Area _____



Area _____



Area _____



Area _____

5. Make some shapes with areas of two and one-half square centimeters.

