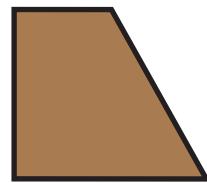

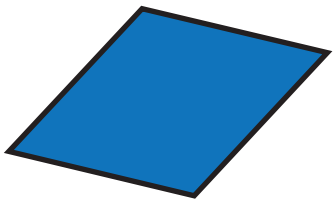


All about Shapes

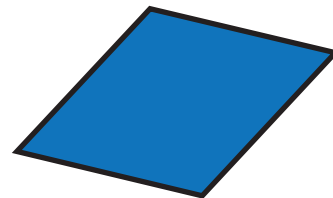

Shape Riddles

1. Read the clues and circle the shape or shapes described.


A. I am a quadrilateral. I have only one set of parallel sides.
What shape(s) am I?



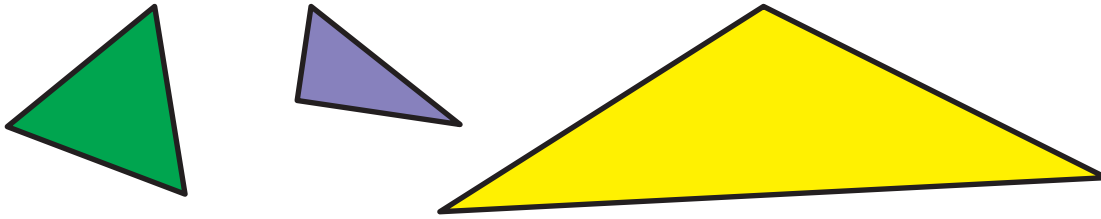
B. I am a quadrilateral. I have two sets of parallel sides.
My sides are all the same length. I do not have any right angles.
What shape(s) am I?



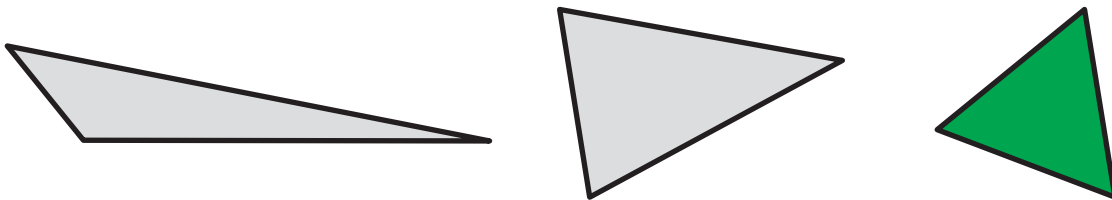
C. I have four sides, four right angles, and two sets of parallel sides. What shape(s) am I?



D. I am a triangle with no right angles. What shape am I?



E. I have three sides. All of my sides are different lengths. What shape am I?



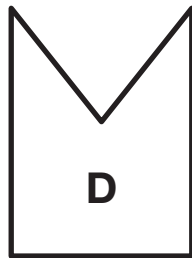
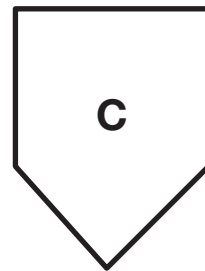
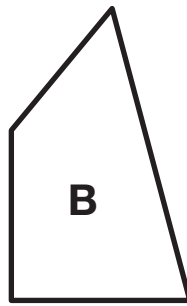
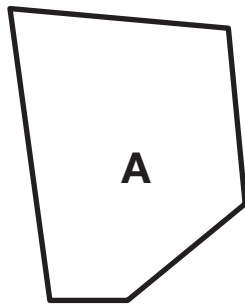
Describe, Draw, and Sort Shapes

2. Describe this shape. Use the words **sides**, **angles**, and **corner** in your description.

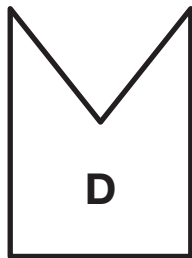
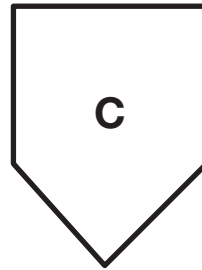
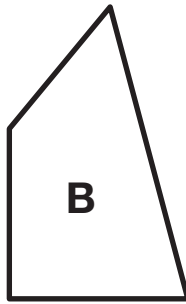
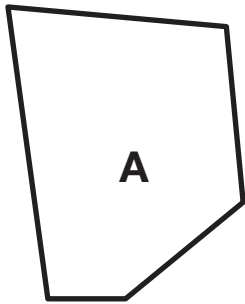


3. Use your ruler to draw a pentagon.

4. Circle all the shapes that have 5 angles.



5. Circle all the shapes that have parallel sides.



**All about Shapes
Feedback Box**

- Identify shapes based on their attributes. [Q# 1]
- Describe shapes. [Q# 2]
- Draw a 2-dimensional shape. [Q# 3]
- Sort shapes based on their attributes. [Q# 4-5]

Expectation	Check In	Comments
E1		