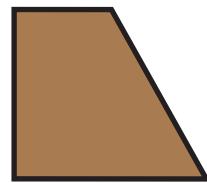

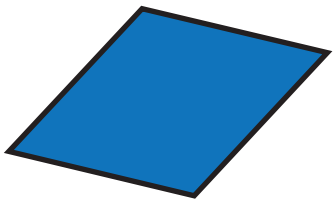


# All about Shapes

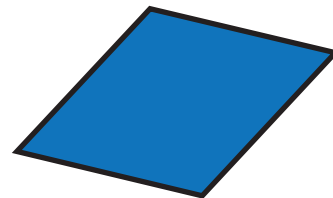

## Shape Riddles

1. Read the clues and circle the shape or shapes described.

**A.** I am a quadrilateral. I have only one set of parallel sides.  
What shape(s) am I?



**B.** I am a quadrilateral. I have two sets of parallel sides.  
My sides are all the same length. I do not have any right angles.  
What shape(s) am I?



**C.** I have four sides, four right angles, and two sets of parallel sides. What shape(s) am I?

