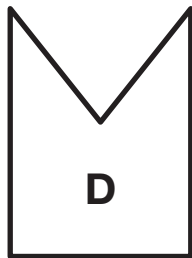
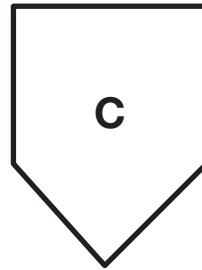
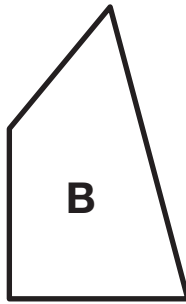
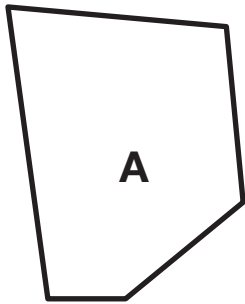


5. Circle all the shapes that have parallel sides.



**All about Shapes  
Feedback Box**

- Identify shapes based on their attributes. [Q# 1]
- Describe shapes. [Q# 2]
- Draw a 2-dimensional shape. [Q# 3]
- Sort shapes based on their attributes. [Q# 4-5]

Expectation	Check In	Comments
E1		