
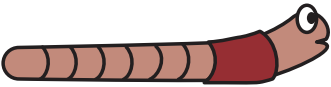


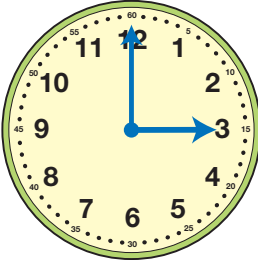
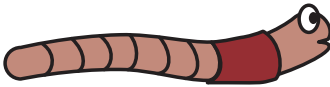
# AA Telling Time



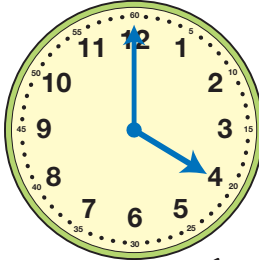
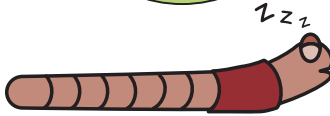
1. Willie Worm crawled along Robin Road.

Start

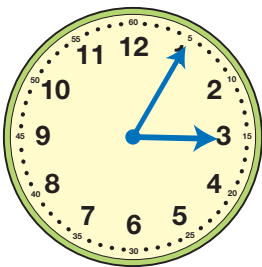
Stop

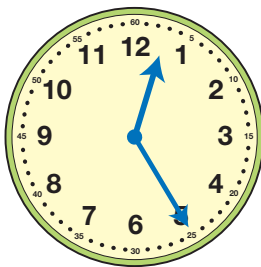
- A. What time did he start? \_\_\_\_\_
- B. What time did he finish? \_\_\_\_\_
- C. How long did he crawl? \_\_\_\_\_

2. Look at the clocks. Draw an “X” on any clock that does not show the correct time.

A.



B.



C.

