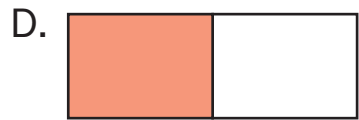
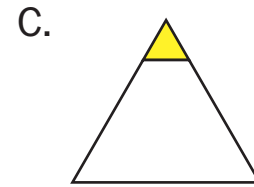
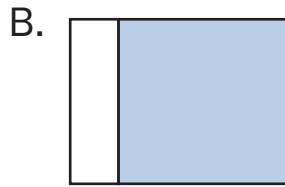
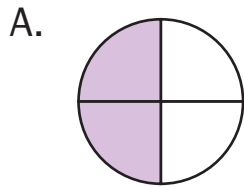


# U Halves



Circle the pictures that show one-half shaded.



F. Choose one that you did not circle and tell why.

# V More Subtraction Practice



Solve.

A.  $\square - 10 = 1$

B.  $13 - 8 = \square$

C.  $\square = 14 - 5$

D.  $12 - \square = 7$

E.  $13 - 4 = \square$

F.  $\square - 10 = 3$

G.  $12 - \square = 2$

H.  $4 = \square - 8$

I. Show or tell your strategy for solving Question E.