

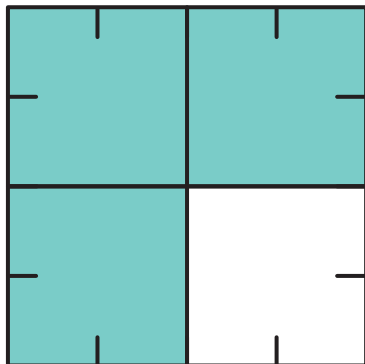
One-Half Plus One-Fourth 3



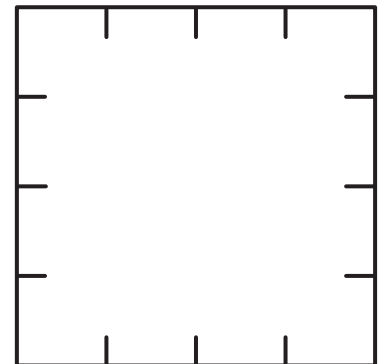
1. What part of Square A is shaded? _____
2. What part of Square C is shaded? _____
3. What part of Square D is shaded? _____

Cut out the shaded parts in Squares C and D. Then paste them on Square B to look like Square A.

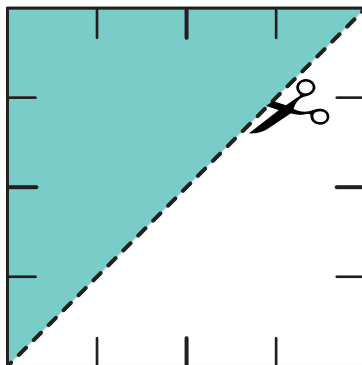
4. One-half plus one-fourth equals _____.



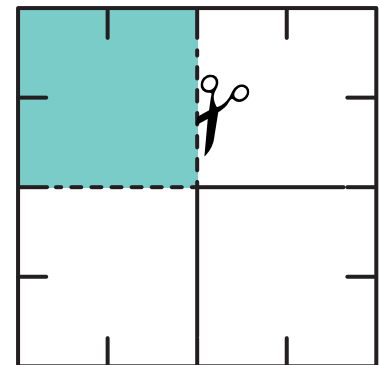
Square A



Square B



Square C



Square D