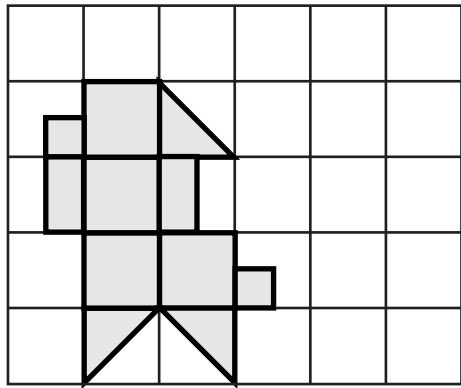


Area Riddles at Home



1. Count the , , , and to find the area of this shape. Include labels.



Number of is _____

Number of is _____

Number of is _____

Number of is _____

Area _____

2. Draw a shape that fits this riddle. Then find its area. Include units.

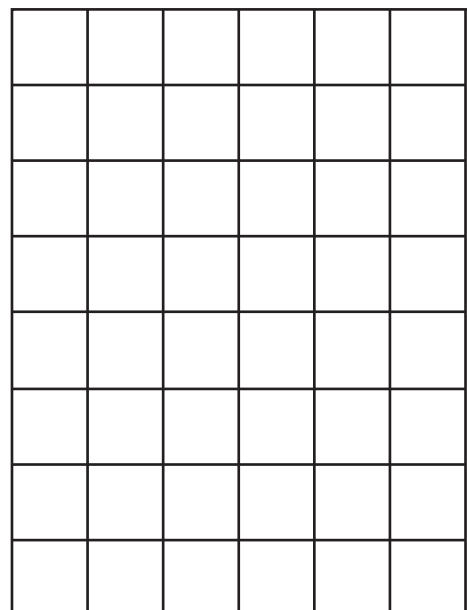
Number of is 6

Number of is 3


Number of is 2

Number of is 4


Area _____



3. Draw a shape that fits this riddle. Then find its area. Include units.

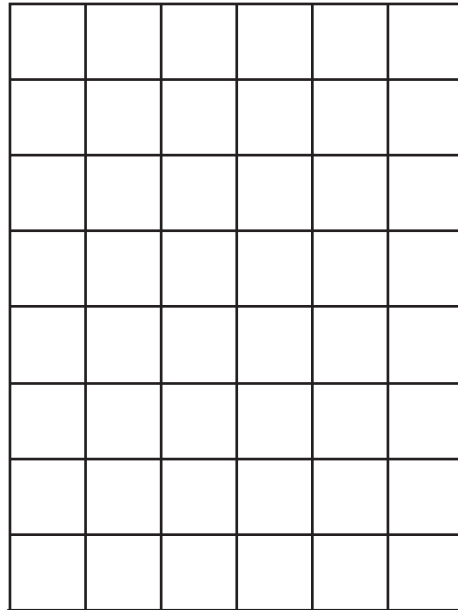
Number of  is 3

Number of  is 2

Number of  is 2

Number of  is 2

Area _____



one-half one-fourth
sq cm