



3. Draw a shape that fits this riddle. Then find its area. Include units.

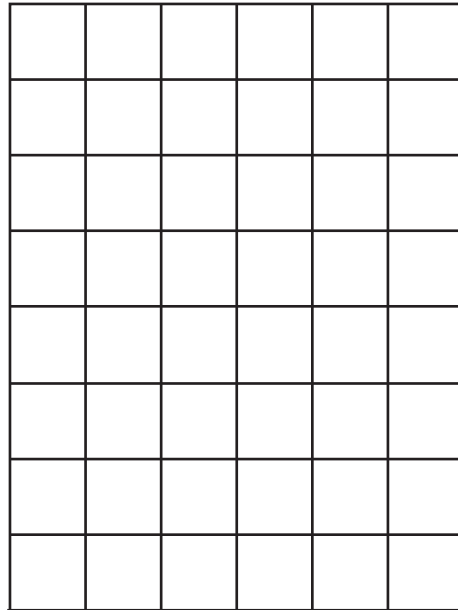
Number of  is 3

Number of  is 2

Number of  is 2

Number of  is 2

Area \_\_\_\_\_



one-half    one-fourth  
sq cm