

**Teacher Guide**

**Shape Riddles (TG)**

**Homework**

**Questions 1–5**


1. square and rhombus
2. square
3. trapezoid
4. square, hexagon, triangle
5. Answer will vary.


Name \_\_\_\_\_ Date \_\_\_\_\_


**Shape Riddles**


**Homework**


**Look at the shapes and solve the riddles.**


  
trapezoid

  
blue rhombus

  
square

  
hexagon

  
triangle

  
tan rhombus

1. I have four sides. They are all the same length. What shape(s) can I be?  
\_\_\_\_\_
2. My four sides are the same length. I also have square angles or square corners. What shape(s) can I be?  
\_\_\_\_\_
3. Two of my sides are parallel to one another. The other two sides are not. What shape(s) can I be?  
\_\_\_\_\_
4. All of my sides are the same length. All my angles, or corners, look the same too. What shape(s) can I be?  
\_\_\_\_\_
5. Write your own shape riddle on the back of this page.

Copyright © Kendall Hunt Publishing Company

TG • Grade 2 • Unit 13 • Lesson 8 Homework Master

**Teacher Guide**