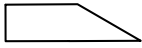





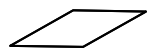
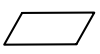


Name _____ Date _____

Fill in the Shapes

<p>A.</p> 	<p>B.</p> 
<p>C.</p> 	<p>D.</p> 
<p>E.</p> 	<p>F.</p> 
<p>G.</p> 	<p>H.</p> 

Copyright © Kendall Hunt Publishing Company

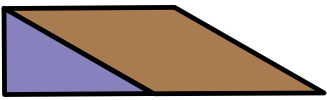

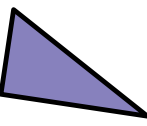

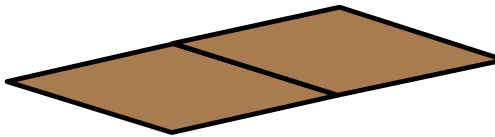
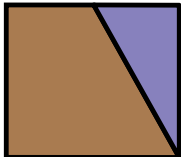


Composing and Decomposing Shapes SAB • Grade 2 • Unit 13 • Lesson 9 691

Student Activity Book - Page 691

Student Activity Book

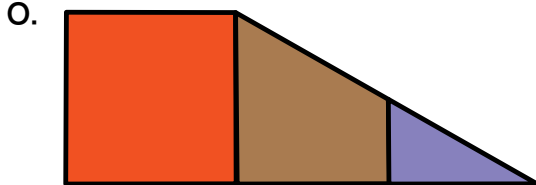
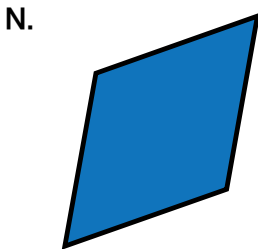
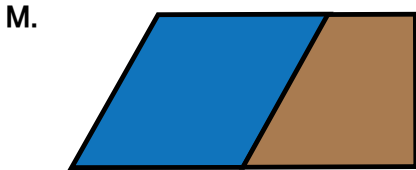
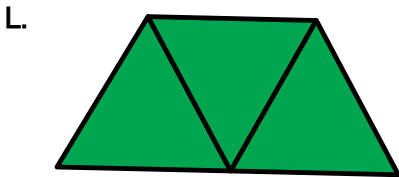



**Fill in the Shapes (SAB pp. 691–694)
Questions A–BB**

Responses may vary. Possible responses provided.

- A. 
- B. 
- C. 
- D. 
- E. 
- F. 
- G. 
- H. 

Copyright © Kendall Hunt Publishing Company

Answer Key • Lesson 9: Composing and Decomposing Shapes



Name _____ Date _____

I.	J.
K.	L.
M.	N.
O.	P.

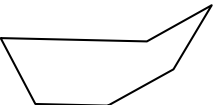
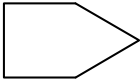
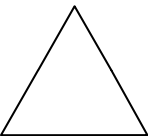
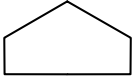

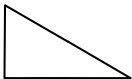
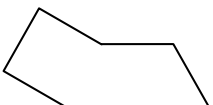
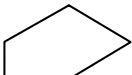
Copyright © Kendall Hunt Publishing Company

692 SAB • Grade 2 • Unit 13 • Lesson 9 Composing and Decomposing Shapes

Student Activity Book - Page 692

Answer Key • Lesson 9: Composing and Decomposing Shapes

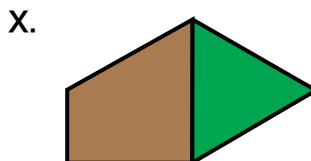
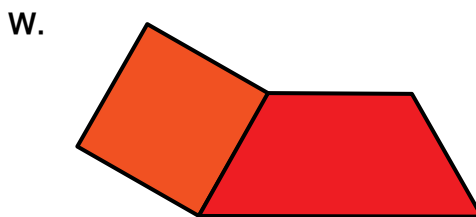
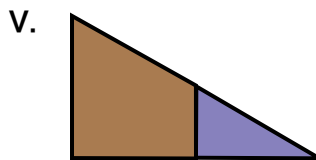

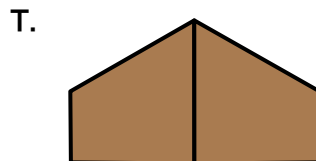
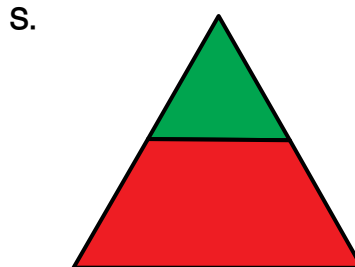
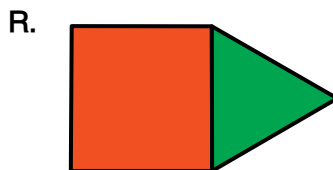
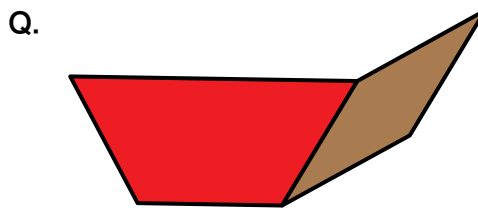
Name _____ Date _____

Q. 	R. 
S. 	T. 
U. 	V. 
W. 	X. 

Copyright © Kendall Hunt Publishing Company

Composing and Decomposing Shapes SAB • Grade 2 • Unit 13 • Lesson 9 693


Student Activity Book - Page 693



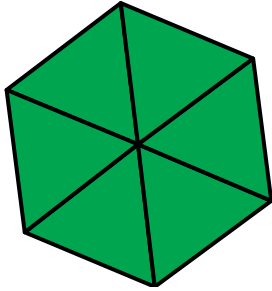
Copyright © Kendall Hunt Publishing Company

Answer Key • Lesson 9: Composing and Decomposing Shapes

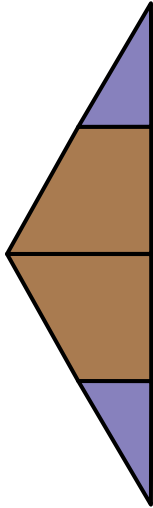
Y.



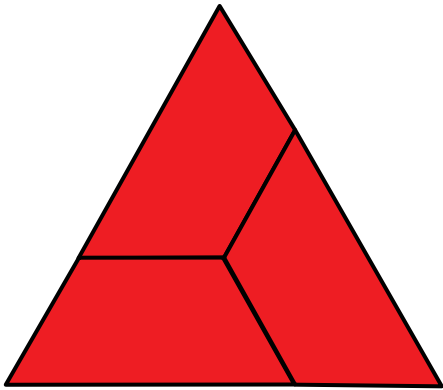
Z.



AA.



BB.



Name _____ Date _____

<p>Y.</p>	<p>Z.</p>
<p>AA.</p>	<p>BB.</p>

694 SAB • Grade 2 • Unit 13 • Lesson 9 Composing and Decomposing Shapes


Copyright © Kendall Hunt Publishing Company

Student Activity Book - Page 694

Name _____ Date _____

Ship Shape

1. Use pattern blocks to fill in the shape. Trace the blocks to show which ones you used.



2. Circle all the true statements about the shape above.

- A. The shape has 8 sides.
- B. The shape has 7 angles.
- C. The shape has no parallel sides.
- D. The shape has 3 sets of parallel sides.
- E. The shape has a right angle.
- F. The shape has no right angles.

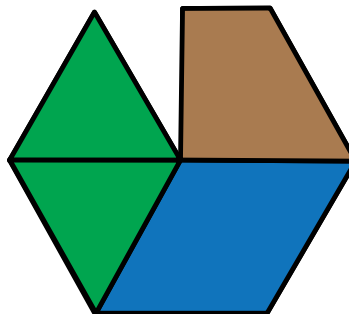
Copyright © Kendall Hunt Publishing Company

Composing and Decomposing Shapes SAB • Grade 2 • Unit 13 • Lesson 9 **695**

Ship Shape (SAB pp. 695–696)

Questions 1–2

1. Possible response:



2. Statements A, D, and E are true and should be circled.

Student Activity Book - Page 695

Name _____ Date _____

Ship Shape Feedback Box		Expectation	Check In	Comments
Compose and decompose shapes into smaller shapes. (Q# 1)		E6		
Describe 2-dimensional shapes based on their attributes. (Q# 2)		E1		

MPE2. Find a strategy. I choose good tools and an efficient strategy for solving the problem.	Yes . . .	Yes, but . . .	No, but . . .	No . . .

Copyright © Kendall Hunt Publishing Company

696 SAB • Grade 2 • Unit 13 • Lesson 9 Composing and Decomposing Shapes

Student Activity Book - Page 696