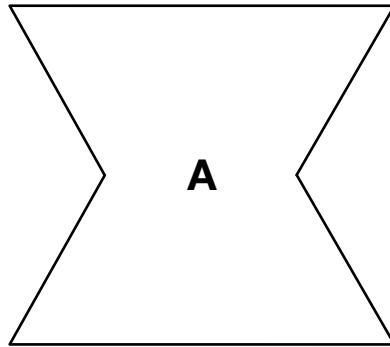


Think about Shapes at Home



Look at each shape and the statements. Circle the true statements.

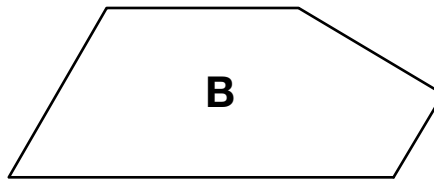
1.



Shape A has 4 sides.

Shape A has 6 sides.

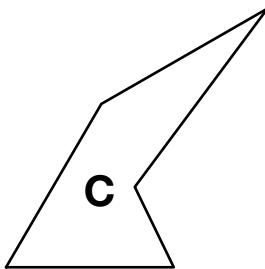
2.



Shape B has 5 angles.

Shape B has 4 angles.

3.



Shape C has a right angle.

Shape C does not have a right angle.