

# T More or Less Than 100



Estimate to decide if the answer will be more than 100 or less than 100. Circle your choice.

1.  $56 + 66 = \square$       more than 100      less than 100

2.  $27 + 81 = \square$       more than 100      less than 100

3.  $53 + 41 = \square$       more than 100      less than 100

4.  $125 - 30 = \square$       more than 100      less than 100

5.  $150 - 25 = \square$       more than 100      less than 100



6. Show or tell how you choose your estimate in Question 4.

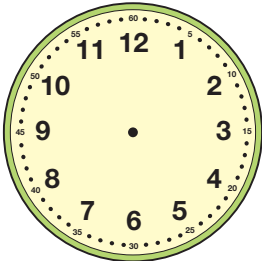
# U Time Crawls



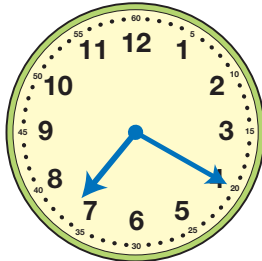

Clarence Caterpillar wanted to see how fast he could walk around the block.

Start



Finish

Draw hands on the center clock to show a time between the time he started and finished.