

Unit 14: Home Practice

Part 1 Subtraction Flash Cards: Group F

Take home your *Triangle Flash Cards: Group F*. Ask a family member to choose one flash card at a time for you to solve. Sort the flash cards into three piles: Facts I Know Quickly, Facts I Can Figure Out, and Facts I Need to Learn. Update your *Subtraction Facts I Know* chart. Clip the cards in the Facts I Know Quickly pile together and place them back into the envelope. Practice the facts in the last two piles again.

Part 2 Subtraction Practice with Tens and Hundreds

A. $15 - 5 = \square$

B. $150 - 50 = \square$

C. $1500 - 500 = \square$

D. $\square = 15 - 6$

E. $\square = 150 - 60$

F. $\square = 1500 - 600$

G. $\square = 16 - 9$

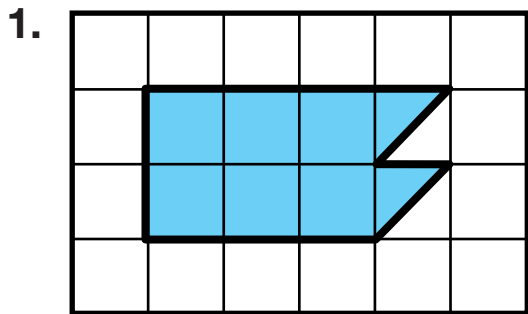
H. $\square = 160 - 90$

I. $\square = 1600 - 900$

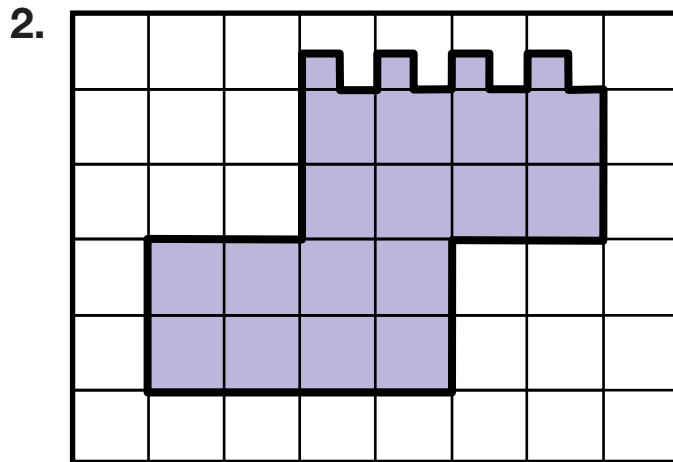
J. Show or tell how you would use addition to solve Question G.

Part 3 Area of Shapes

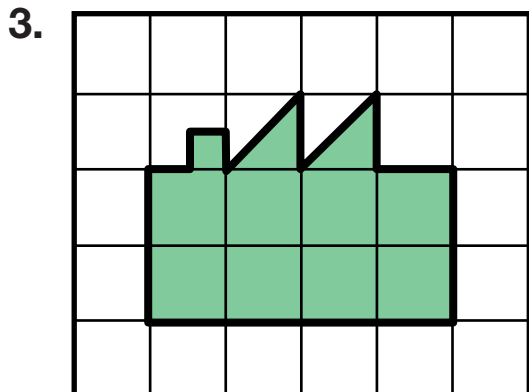
Find the area of each shape in square centimeters.



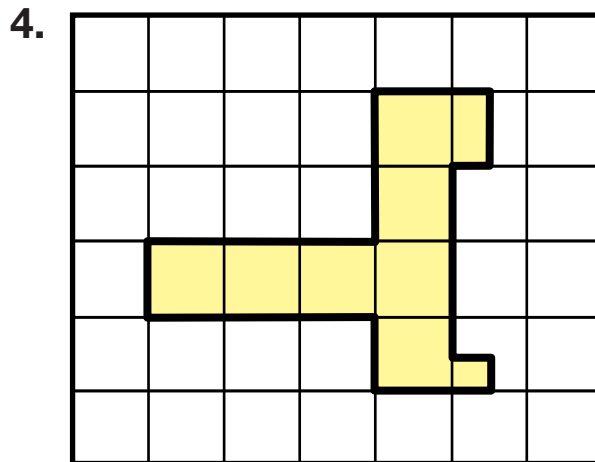
Area _____



Area _____



Area _____



Area _____

Part 4 Fair Shares

1. Draw 5 dog bowls. Share 15 bones.

How many will each dog get? _____

Number sentence _____

2. Draw 3 party bags. Share 19 gumballs.

How many gumballs will be in each bag? _____

Number sentence _____

3. The pet shop owner has 17 bags of kitty treats. She needs 2 bags of kitty treats every day. How many days will the kitty treats last?

Number sentence _____

Part 5 Add and Subtract

A. $15 - 9 = \square$

B. $18 - \square = 9$

C. $14 - 6 = \square$

D. $17 - \square = 10$

E. $14 - \square = 6$

F. $15 - \square = 9$

G. $9 + \square = 16$

H. $8 + \square = 17$

I. $7 + \square = 17$

J. $9 + 9 = \square$


K. Explain your strategy for solving Question E.

L. One week Jenelle babysat for 9 hours. The next week she babysat for 17 hours.

1. How many more hours did she babysit in the second week?
2. How many hours did she babysit in the two weeks together?
3. Jenelle's aunt pays her \$2.00 for each hour. How much did she pay Jenelle in the two weeks? Show how you know.

Part 6 Zoo Stickers

1. The zoo gift shop sells sheets of animal stickers. How many stickers are on each sheet? Write a number sentence.



Number sentence _____

2. Emily bought two sheets of stickers. How many stickers did she buy?
3. Emily gives her two little brothers one sheet of stickers to share. If they share them equally, how many stickers does each boy get? Explain your thinking.

Name _____ Date _____

Unit 14: Home Practice

Part 1 Subtraction Flash Cards: Group F
 Take home your *Triangle Flash Cards: Group F*. Ask a family member to choose one flash card at a time for you to solve. Sort the flash cards into three piles: Facts I Know Quickly, Facts I Can Figure Out, and Facts I Need to Learn. Update your *Subtraction Facts I Know* chart. Clip the cards in the Facts I Know Quickly pile together and place them back into the envelope. Practice the facts in the last two piles again.

Part 2 Subtraction Practice with Tens and Hundreds

A. $15 - 5 = \square$ B. $150 - 50 = \square$
 C. $1500 - 500 = \square$ D. $\square = 15 - 6$
 E. $\square = 150 - 60$ F. $\square = 1500 - 600$
 G. $\square = 16 - 9$ H. $\square = 160 - 90$
 I. $\square = 1600 - 900$

J. Show or tell how you would use addition to solve Question G.

Copyright © Kendall Hunt Publishing Company

TG • Grade 2 • Unit 14 • Home Practice |

Teacher Guide - Page 1

Teacher Guide

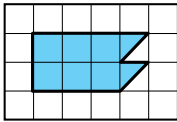
Part 2. Subtraction Practice with Tens and Hundreds (TG p. 1)

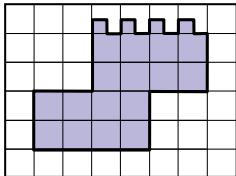
Questions A–J

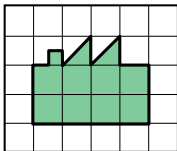
- A. 10
- B. 100
- C. 1000
- D. 9
- E. 90
- F. 900
- G. 7
- H. 70
- I. 700
- J. Possible response: I know $10 + 6 = 16$, so $9 + 7 = 16$ and $16 - 9 = 7$.

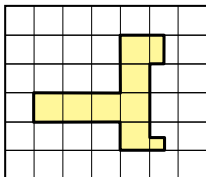
Name _____ Date _____

Part 3 Area of Shapes
 Find the area of each shape in square centimeters.

1. 
 Area _____

2. 
 Area _____

3. 
 Area _____

4. 
 Area _____

Copyright © Kendall Hunt Publishing Company

2 TG • Grade 2 • Unit 14 • Home Practice

Teacher Guide - Page 2

Part 3. Area of Shapes (TG p. 2)

Questions 1–4

- 1. 7 sq cm
- 2. 17 sq cm
- 3. 9 and one-fourth sq cm
- 4. 7 and three-fourths sq cm

Copyright © Kendall Hunt Publishing Company

Part 4. Fair Shares (TG p. 3)
Questions 1–3

1. 3 bones; $3 + 3 + 3 + 3 + 3 = 15$ or $5 \times 3 = 15$
2. 6 gumballs with 1 gumball left over;
 $6 + 6 + 6 + 1 = 19$ or $3 \times 6 + 1 = 19$
3. 8 days with 1 bag of treats left over;
 $2 + 2 + 2 + 2 + 2 + 2 + 2 + 2 + 1 = 17$ or $8 \times 2 + 1 = 17$

Part 5. Add and Subtract (TG p. 4)
Questions A–L

- | | |
|-------|-------|
| A. 6 | B. 9 |
| C. 8 | D. 7 |
| E. 8 | F. 6 |
| G. 7 | H. 9 |
| I. 10 | J. 18 |
- K. Possible response: I know $6 + 8 = 14$, so $14 - 8 = 6$.
- L. 1. 8 hours
 2. 26 hours
 3. \$52; Possible strategy:
 $20 + 20 + 6 + 6 = 40 + 12 = 52$

Copyright © Kendall Hunt Publishing Company

Name _____ Date _____

Part 4 Fair Shares

1. Draw 5 dog bowls. Share 15 bones.

How many will each dog get? _____

Number sentence _____

2. Draw 3 party bags. Share 19 gumballs.

How many gumballs will be in each bag? _____

Number sentence _____

3. The pet shop owner has 17 bags of kitty treats. She needs 2 bags of kitty treats every day. How many days will it kitty treats last?

Number sentence _____

TG • Grade 2 • Unit 14 • Home Practice 3

Teacher Guide - Page 3

Name _____ Date _____

Part 5 Add and Subtract

A. $15 - 9 = \square$	B. $18 - \square = 9$
C. $14 - 6 = \square$	D. $17 - \square = 10$
E. $14 - \square = 6$	F. $15 - \square = 9$
G. $9 + \square = 16$	H. $8 + \square = 17$
I. $7 + \square = 17$	J. $9 + 9 = \square$

K. Explain your strategy for solving Question E.

L. One week Jenelle babysat for 9 hours. The next week she babysat for 17 hours.

1. How many more hours did she babysit in the second week?
2. How many hours did she babysit in the two weeks together?
3. Jenelle's aunt pays her \$2.00 for each hour. How much did she pay Jenelle in the two weeks? Show how you know.


4 TG • Grade 2 • Unit 14 • Home Practice

Teacher Guide - Page 4

Name _____ Date _____

Part 6 Zoo Stickers

1. The zoo gift shop sells sheets of animal stickers. How many stickers are on each sheet? Write a number sentence.



Number sentence _____

2. Emily bought two sheets of stickers. How many stickers did she buy?
3. Emily gives her two little brothers one sheet of stickers to share. If they share them equally, how many stickers does each boy get? Explain your thinking.

Copyright © Kendall Hunt Publishing Company

**Part 6. Zoo Stickers (TG p. 5)
Questions 1–3**

- 35 stickers; Possible number sentence:
 $5 + 5 + 5 + 5 + 5 + 5 + 5 = 35$
- 70 stickers; $35 + 35 = 70$
- Each boy gets 17 stickers and there is one sticker left over. Possible strategy: If there were 20 stickers, each would get half, 10. Half of another 10 is 5. So half of 30 is 15. Half of 4 is 2. So half of 34 is 17 and there is one sticker left over.