

Which is Greater

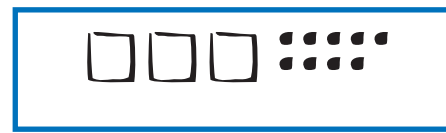
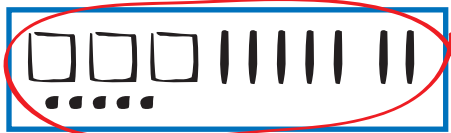


Dear Family Member:

The numbers in each box are represented with base-ten pieces. The pack represents 1000, the flat represents 100, the skinny represents 10, and the bit represents 1. We use the base-ten shorthand system to simplify the recording of base-ten pieces. The symbol \square represents 1000, the symbol \square represents 100, the symbol $|$ represents 10, and the symbol \bullet represents 1. Thank you.

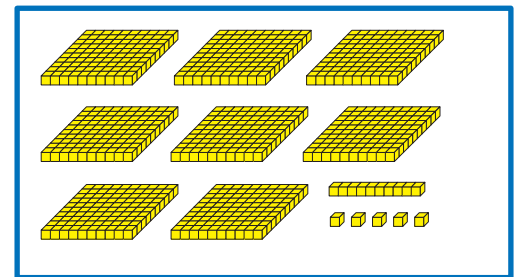

1. Circle the box that shows the greater number. Write a number sentence using $<$ or $>$ to compare the numbers.

Example



Number sentence 375 > 309

A.



Number sentence _____

> greater than
< less than
= equal to



