

# Which Is Greater

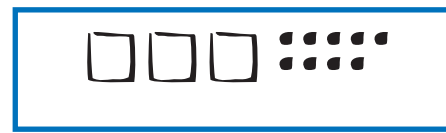
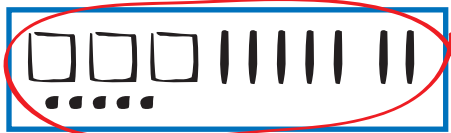


Dear Family Member:

The numbers in each box are represented with base-ten pieces. The pack represents 1000, the flat represents 100, the skinny represents 10, and the bit represents 1. We use the base-ten shorthand system to simplify the recording of base-ten pieces. The symbol  $\square$  represents 1000, the symbol  $\square$  represents 100, the symbol  $|$  represents 10, and the symbol  $\bullet$  represents 1. Thank you.

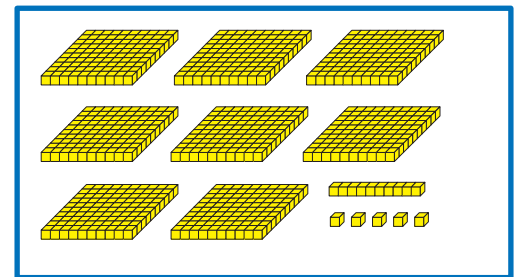

1. Circle the box that shows the greater number. Write a number sentence using  $<$  or  $>$  to compare the numbers.

## Example



Number sentence 375 > 309

A.



Number sentence \_\_\_\_\_

> greater than  
< less than  
= equal to

