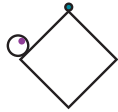


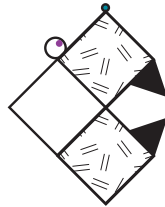
# L-Gator

The L-Gator is only one square when it is one year old.



one-year-old L-Gator

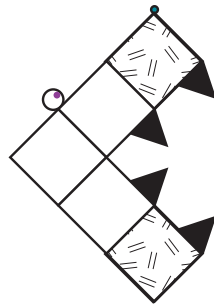
It has no teeth at first. By the second year it grows two teeth.



two-year-old L-Gator

1. How many squares does an L-Gator have when it is two years old? \_\_\_\_\_

By the third year, the L-Gator looks a little dangerous.



three-year-old L-Gator

2. How many teeth does a three-year-old L-Gator have?  
\_\_\_\_\_
3. How many squares does a three-year-old L-Gator have?  
\_\_\_\_\_
4. How many teeth does an L-Gator grow each year?  
\_\_\_\_\_

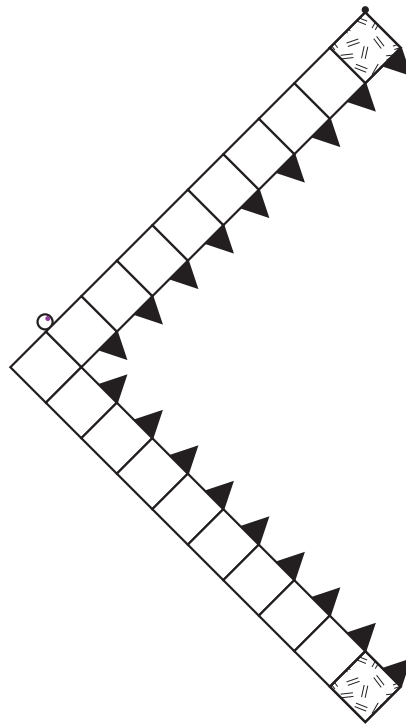
5. Without drawing a five-year-old L-Gator, how many teeth and squares do you think it would have? \_\_\_\_\_

\_\_\_\_\_

6. How did you find the answer? \_\_\_\_\_

\_\_\_\_\_

7. How old is the L-Gator below? \_\_\_\_\_



8. How old would an L-Gator be if it had 21 squares? \_\_\_\_\_

9. How old would an L-Gator be if it had 51 squares? \_\_\_\_\_

10. How can you find out how many teeth and squares a 100-year-old L-Gator would have? \_\_\_\_\_

\_\_\_\_\_

\_\_\_\_\_