


## **E** Broken Clock



Professor Peabody's clock is broken. The minute hand has fallen off. He says that he can tell time with just the hour hand. Your teacher will show you some times on Professor Peabody's clock. Decide the hour, then estimate the number of minutes past the hour.




## **F** More Broken Clocks




Estimate the time for each clock using the hour hand. The minute hand is missing.

1.




\_\_\_\_\_

2.




\_\_\_\_\_

3.




\_\_\_\_\_

4.




\_\_\_\_\_

5.



\_\_\_\_\_

6.



\_\_\_\_\_