



# Kim's and Suzanne's Marbles



## Homework

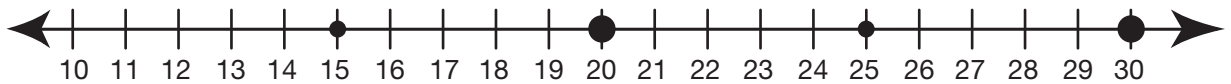
Choose one group of problems to complete.

Workshop Menu		
<b>Can I Do This?</b>  Use facts I know to solve problems.	<b>▲ Working On It!</b> I could use some extra help.  Carla	<b>● Getting It!</b> I just need some more practice.  Natasha
	<b>Questions 4-7</b>	<b>Questions 1-3</b>

Solve each problem using the number line. Write a number sentence that shows your solution strategy.

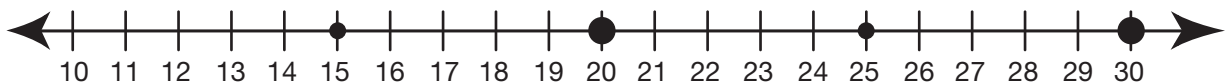
Suzanne has a jar of 27 marbles. Start each problem with 27 marbles.

- 1.** If Suzanne takes 10 marbles out of the jar, how many are left in the jar?



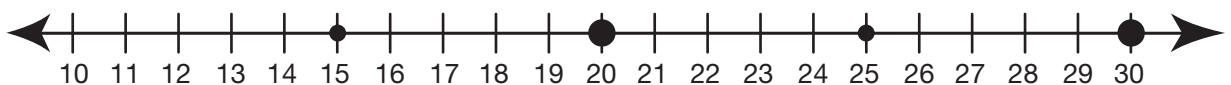
Number sentence: \_\_\_\_\_

- 2.** If she takes 8 marbles out of the jar, how many are left in the jar?



Number sentence: \_\_\_\_\_

- 3.** If she takes 11 marbles out of the jar, how many are left in the jar?



Number sentence: \_\_\_\_\_