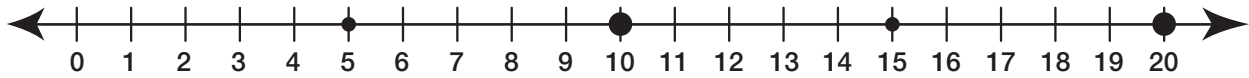


**Solve each problem using the number line. Write a number sentence that shows your solution strategy.**

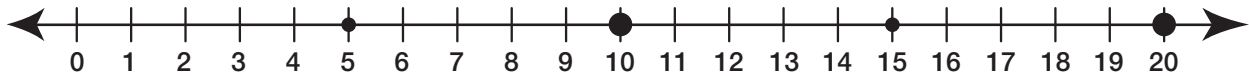
Kim has a jar of 17 marbles. Start each problem with 17 marbles.

- 4.** If Kim takes 10 marbles out of the jar, how many are left in the jar?



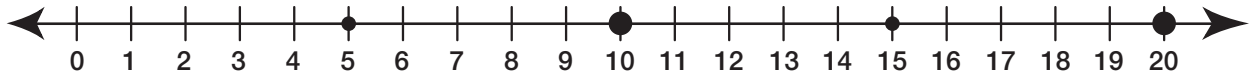
Number sentence: \_\_\_\_\_

- 5.** If she takes 9 marbles out of the jar, how many are left in the jar?



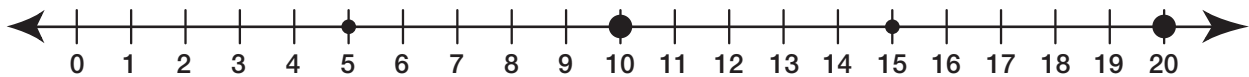
Number sentence: \_\_\_\_\_

- 6.** If she takes 8 marbles out of the jar, how many are left in the jar?



Number sentence: \_\_\_\_\_

- 7.** If she takes 11 marbles out of the jar, how many are left in the jar?



Number sentence: \_\_\_\_\_