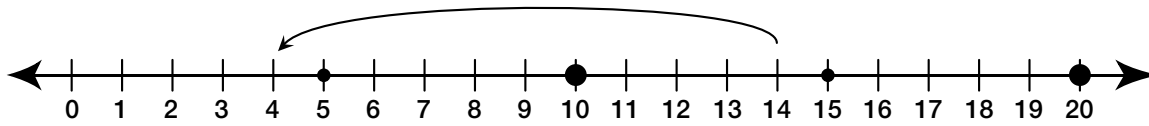


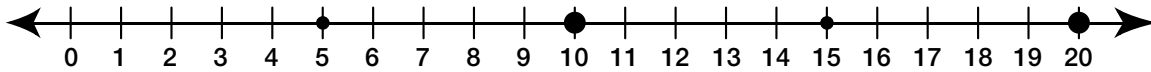
Part 3 Number Line Subtraction

Use the number lines to show how you can use ten to help you solve the subtraction number sentences.

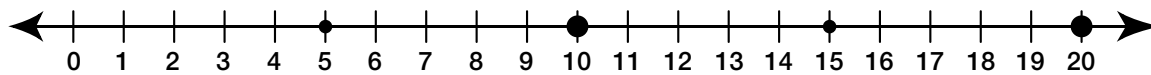
1. Here is a solution for solving $14 - 10$.



A. Solve $13 - 10 = \square$ on the number line.



B. Solve $16 - 10 = \square$ on the number line.



C. Solve $19 - 10 = \square$ on the number line.

