





8. Show all the different ways you can package 27 Chocos on the following packaging sheet. Write number sentences showing the partitions.

	
	27



Check-In: Question 9

9. Show all the different ways you can package 45 Chocos on the following packaging sheet. Write number sentences showing the partitions.

	
	45

10. For Questions 4–9, circle the partition in the table that uses the fewest packages. (For example, the partition of 32 into 1 skinny and 22 bits uses 23 packages.) Look for a pattern that describes the partition that uses the fewest packages. Be ready to talk about the pattern you found.