









Professor Peabody was helping package Chocos at the TIMS Candy Company. He wrote the different ways he could package the Chocos on the packaging sheets. Some of the numbers were written with invisible ink. Help fill in the missing numbers. The first one is an example.






Ex.

	
	32
1 	22
2 	12
3	2





4.

	
	24
	14
2 	



5.

	
	
1	37
	27
4	17
	

6.

	
	29
1 	
	9

- 7.** Maruta made 43 Chocos. She wrote down all the different ways 43 Chocos can be packaged. Then, she showed the first two partitions using number sentences. Write number sentences for the other partitions.

	
	43
1	33
2	23
3	13
4	3

43 = 10 + 33

 43 = 20 + 23

