









# Large Orders

1. Eric recorded his Choco orders on a Base-Ten Recording Sheet. The sheet below shows three ways he can package one of his orders. He wrote a number sentence to show the number of Chocos in the order. Complete his sheet with a number sentence for each of the other ways.





 1000s	 100s	 10s	 1s	Number Sentence
	2	3	7	$237 = 200 + 30 + 7$
	1	13	7	
	2	2	17	

2. For each Choco order below, write a number sentence to show the number ordered. Then write a different way to fill the order, along with a number sentence to match.





**A.**

 1000s	 100s	 10s	 1s	Number Sentence
2		5		

**B.**

 1000s	 100s	 10s	 1s	Number Sentence
3	4		7	

**C.**

 1000s	 100s	 10s	 1s	Number Sentence
6	2	5		