
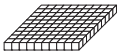






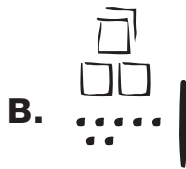


<b>Base-ten piece</b>	 <b>pack</b>	 <b>flat</b>	 <b>skinny</b>	 <b>bit</b>
<b>Base-ten shorthand</b>				

3. Professor Peabody used base-ten shorthand to show the Chocos he made at the TIMS Candy Company. Figure out how many Chocos Professor Peabody made. Write a number sentence to show your answer.



4. Professor Peabody used base-ten shorthand to take an order for Chocos. Draw the same number of Chocos using the Fewest Pieces Rule. Then write down how many Chocos were made.

