
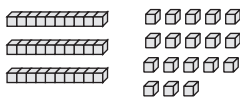
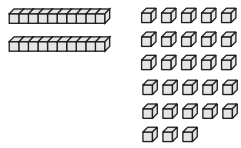

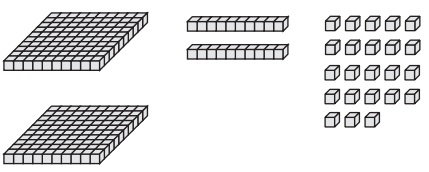



Name _____ Date _____

Show Choco Packages

At the TIMS Candy Company, Maya and Nikia are packaging Chocos. They do not always follow the Fewest Pieces Rule.

- For each row, find the number of Chocos Maya and Nikia packaged.
- If the number of Chocos is the same, use base-ten shorthand to show how to package them using the Fewest Pieces Rule. If they are not the same, write “not the same” in the Fewest Pieces column.

	Maya's Count	Nikia's Count	Fewest Pieces
1. 	 Number of Chocos: _____	 Number of Chocos: _____	
2. 	 Number of Chocos: _____	 Number of Chocos: _____	