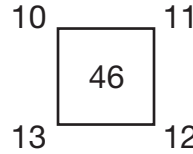
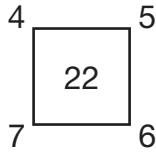
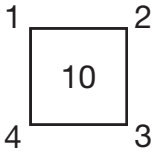


0 Boxes



How are these boxes alike?



Make up two more boxes like these.

p More Multiplication Stories



1. Write a story and draw a picture about $3 \times 8 = \square$. Complete the number sentence. Write it on your picture.

2. Write a story and draw a picture about $2 \times \square = 16$. Complete the number sentence. Write it on your picture.