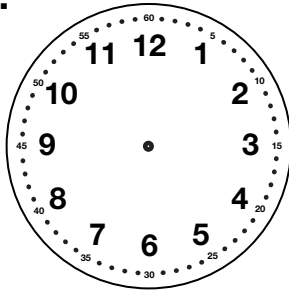


Part 3 Time and Money

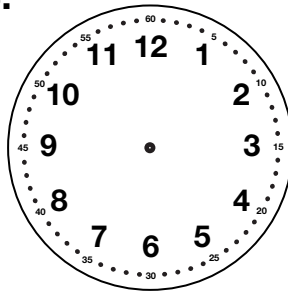
1. Use the clocks to draw the minute and hour hands for the time that the activity begins.

A.



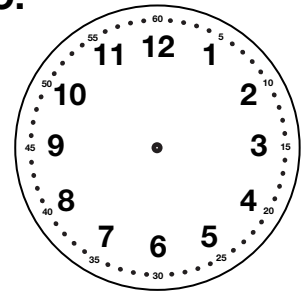
I brush my teeth before school.

B.



I go to bed.

C.



I do my homework.

2. Maruta works part-time at the TIMS Candy Company. She starts work at 8 A.M. and leaves at 11:30 A.M. How many hours does she work?

3. **A.** Emily has 7 dimes and 25 pennies. How much money does she have?

B. If she traded the pennies for as many dimes as possible, how many dimes would she have in all?

C. How many pennies would be left over?

4. Jason has 3 dollars, 2 dimes, and 7 pennies. If he trades his money for all pennies, how many pennies will he have?
